
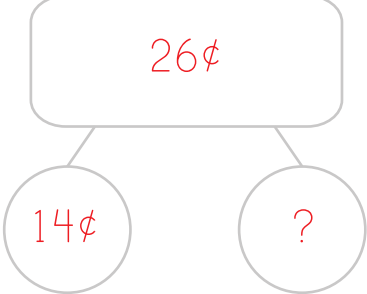







Name: \_\_\_\_\_

Date: \_\_\_\_\_

# Spending Money Word Problems

Read the word problems, then fill out the number bonds to answer the question. Show your work.




<p><b>Example:</b> Gloria had 26¢. She gave Penelope 14¢ to buy a chocolate bar. How much did she have left over?</p> 	<p><b>Number Bond</b></p> 	<p><b>Work space</b></p> 	<p><b>Answer</b></p> <p>12¢</p>
<p>1. Kieran had 87¢. How much would he have left over if he bought a whistle for 75¢?</p> 			
<p>2. Sin-Ku had 94¢. He bought a cookie for 75¢ from the bake sale. How much money did he have left?</p> 			

Name: \_\_\_\_\_

Date: \_\_\_\_\_

# Spending Money Word Problems (continued)

Read the word problems, then fill out the number bonds to answer the question. Show your work.

3. Milo had 55¢. He saw a comic book at a garage sale for 49¢. How much money did he have left over? 	Number Bond	Work space	Answer
4. Andrea had 48¢. She bought origami paper from Milo for 25¢. How much money did Andrea have left? 	Number Bond	Work space	Answer
5. Norah had 67¢. She bought a raffle ticket at the school fair for 25¢. How much did she have left to spend? 	Number Bond	Work space	Answer